

三角形の角度 2

目標時間	10分
------	-----

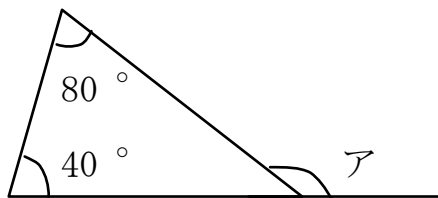
NO. 1

名前

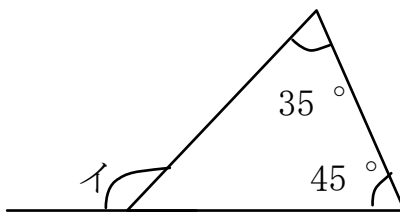
/6

◆ 次のアからカの角度を求めなさい。

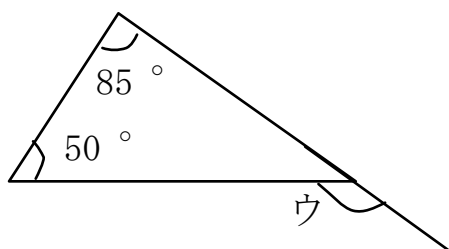
①



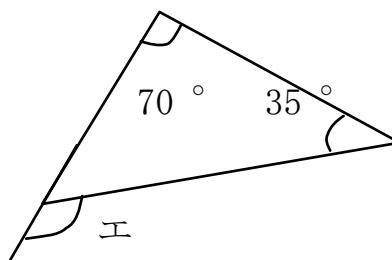
②



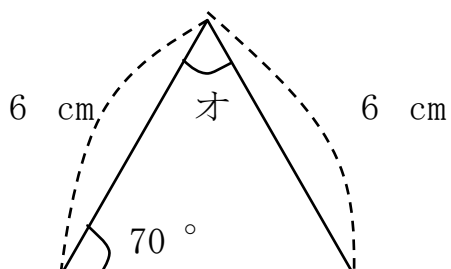
③



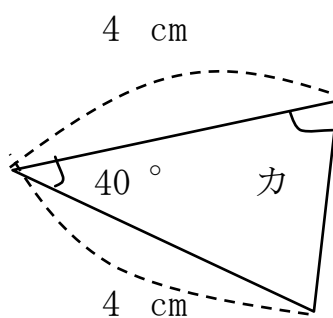
④



⑤



⑥



答え

$$\textcircled{1} \quad 80 + 40 = 120 \text{ } ^\circ$$

$$\textcircled{2} \quad 35 + 45 = 80 \text{ } ^\circ$$

$$\textcircled{3} \quad 85 + 50 = 135 \text{ } ^\circ$$

$$\textcircled{4} \quad 70 + 35 = 105 \text{ } ^\circ$$

$$\textcircled{5} \quad 70 \times 2 = 140 \quad 180 - 140 = 40 \text{ } ^\circ$$

$$\textcircled{6} \quad 180 - 40 = 140 \quad 140 \div 2 = 70 \text{ } ^\circ$$