

平行四辺形の面積

目標時間	5分
------	----

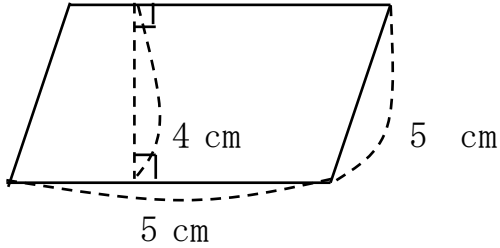
NO. 2

名前	
----	--

/ 6

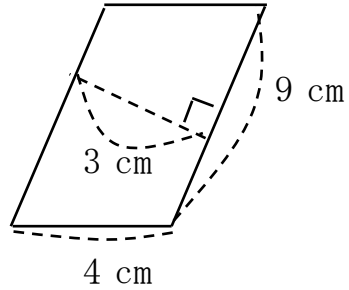
◆ 次の平行四辺形の面積をもとめましょう。(単位も書きましょう)

①



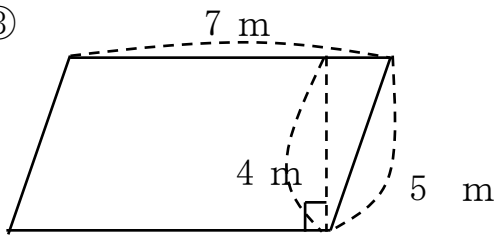
--

②



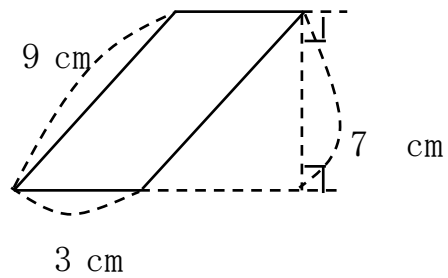
--

③



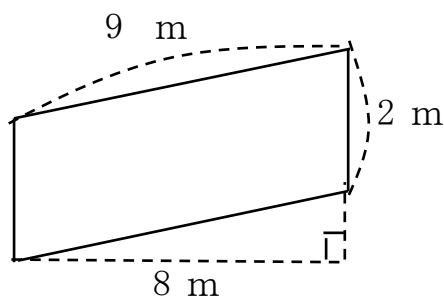
--

④



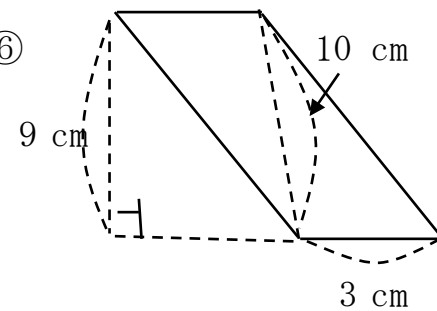
--

⑤



--

⑥



--

答え

$$\textcircled{1} \quad 5 \times 4 = 20 \quad 20 \text{ cm}^2$$

$$\textcircled{1} \quad 9 \times 3 = 27 \quad 27 \text{ cm}^2$$

$$\textcircled{1} \quad 7 \times 4 = 28 \quad 28 \text{ m}^2$$

$$\textcircled{1} \quad 3 \times 7 = 21 \quad 21 \text{ cm}^2$$

$$\textcircled{1} \quad 2 \times 8 = 16 \quad 16 \text{ m}^2$$

$$\textcircled{1} \quad 3 \times 9 = 27 \quad 27 \text{ cm}^2$$