

ひし形の面積

目標時間	7分
------	----

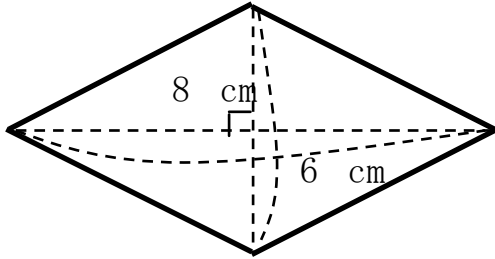
NO. 2

名前

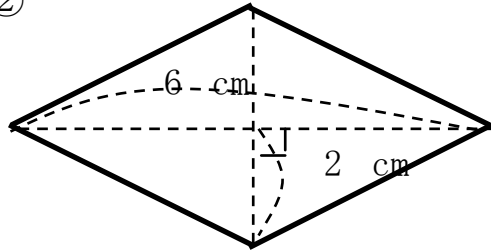
/ 5

◆ 次のひし形の面積をもとめましょう。

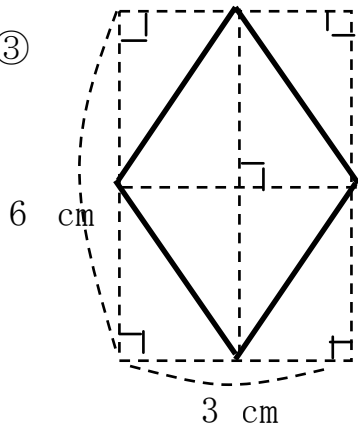
①



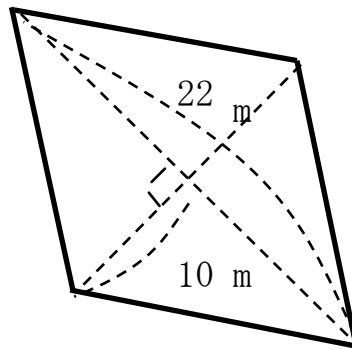
②



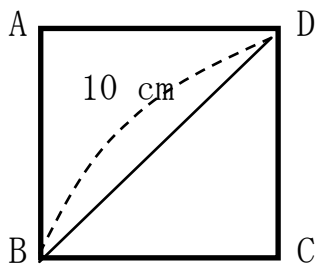
③



④



⑤



四角形ABCDは正方形

答え

$$\textcircled{1} \quad 8 \times 6 \div 2 = 24$$

$$24 \quad \text{cm}^2$$

$$\textcircled{2} \quad 6 \times 4 \div 2 = 12$$

$$12 \quad \text{cm}^2$$

$$\textcircled{3} \quad 6 \times 3 \div 2 = 9$$

$$9 \quad \text{cm}^2$$

$$\textcircled{4} \quad 22 \times 20 \div 2 = 220$$

$$220 \quad \text{m}^2$$

$$\textcircled{5} \quad 10 \times 10 \div 2 = 50$$

$$50 \quad \text{cm}^2$$