

三角形の面積（基本1）

目標時間	7分
------	----

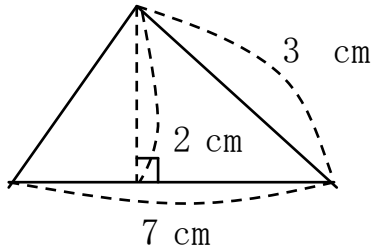
NO. 3

名前

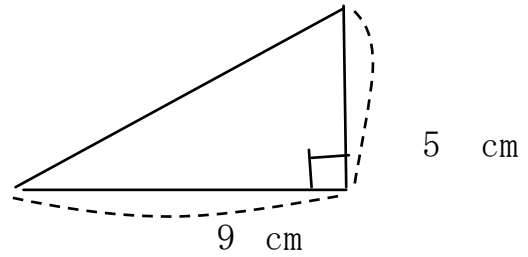
/ 6

◆ 次の三角形の面積をもとめましょう。（単位も書きましょう）

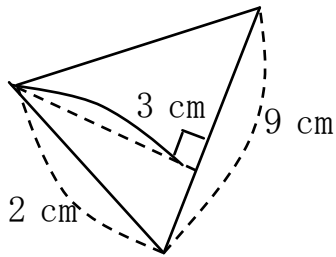
①



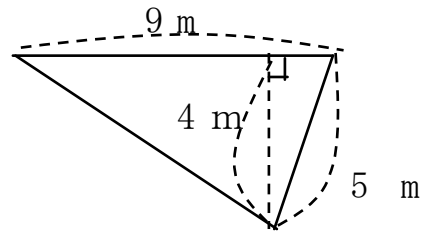
②



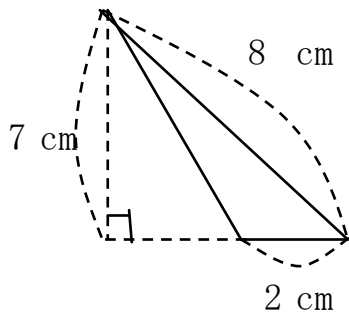
③



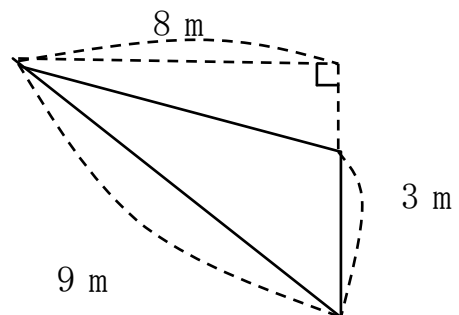
④



⑤



⑥



答え

$$\textcircled{1} \quad 7 \times 2 \div 2 = 7 \qquad 7 \text{ cm}^2$$

$$\textcircled{2} \quad 9 \times 5 \div 2 = 22.5 \qquad 22.5 \text{ cm}^2$$

$$\textcircled{3} \quad 9 \times 3 \div 2 = 13.5 \qquad 13.5 \text{ cm}^2$$

$$\textcircled{4} \quad 9 \times 4 \div 2 = 18 \qquad 18 \text{ m}^2$$

$$\textcircled{5} \quad 2 \times 7 \div 2 = 7 \qquad 7 \text{ cm}^2$$

$$\textcircled{6} \quad 3 \times 8 \div 2 = 12 \qquad 12 \text{ m}^2$$