

分度器と計算でもとめる

目標時間	10分
------	-----

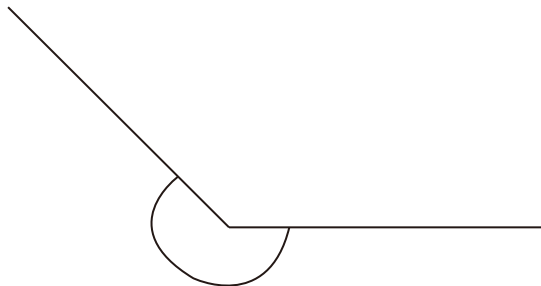
NO. 2

名前

／5

分度器と計算で角度を求めましょう

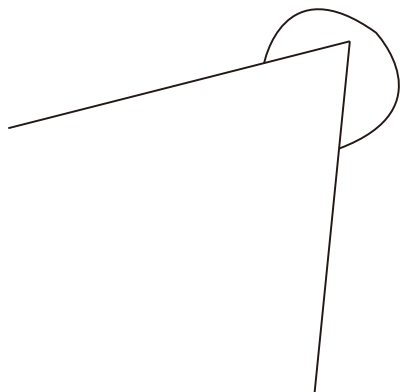
①



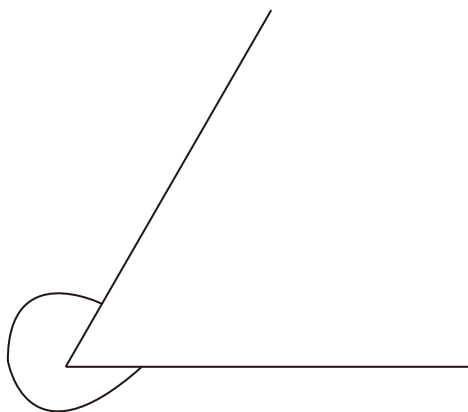
②



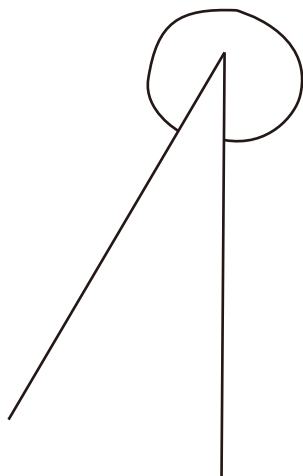
③



④

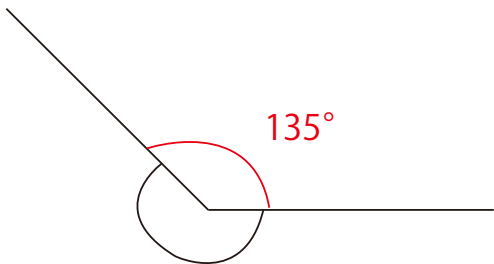


⑤



答え

①



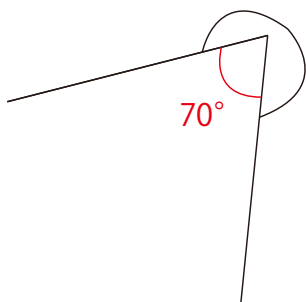
$$360 - 135 = 225 \quad 225^\circ$$

②



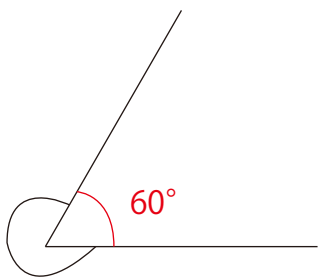
$$360 - 170 = 190 \quad 190^\circ$$

③



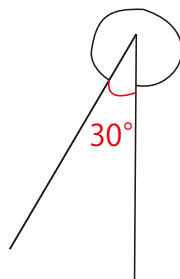
$$360 - 70 = 290 \quad 290^\circ$$

④



$$360 - 60 = 300 \quad 300^\circ$$

⑤



$$360 - 30 = 330 \quad 330^\circ$$