

角度をかく 1

目標時間	10分
------	-----

NO. 2

名前

／6

アを中心として次の角度をかきましょう。

① 40 °

② 70 °



③ 105 °

④ 170 °



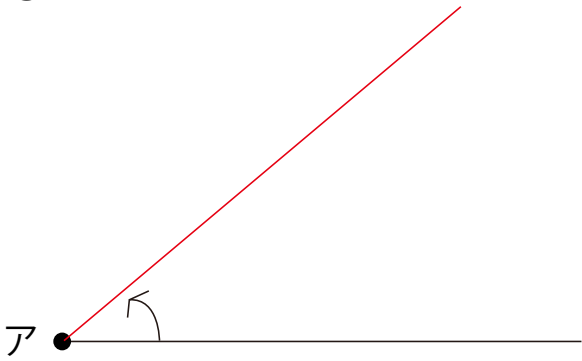
⑤ 55 °

⑥ 135 °

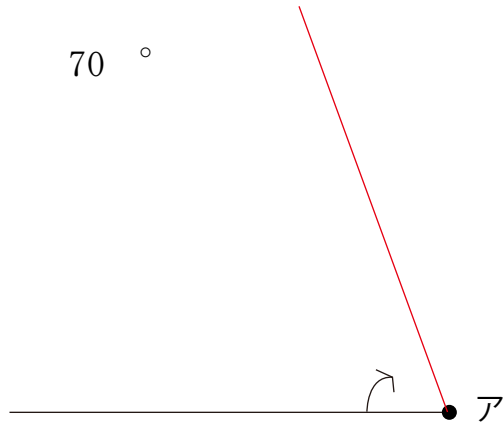


答え

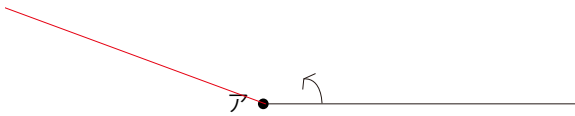
① 40°



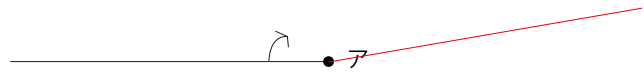
② 70°



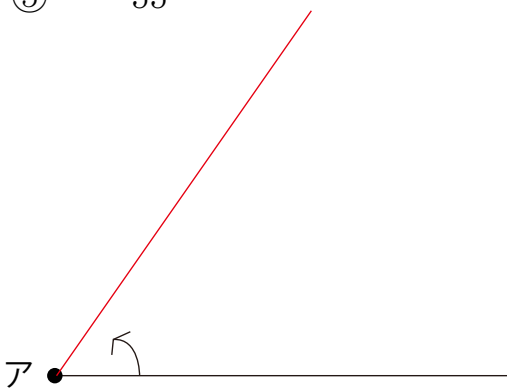
③ 140°



④ 170°



⑤ 55°



⑥ 135°

