

# 角度をかく 2

目標時間	10分
------	-----

NO.1

名前

／5

アを中心として次の角度をかきましょう。

① 180 °

② 200 °



③ 260 °

④ 280 °

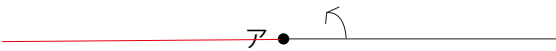


⑤ 320 °



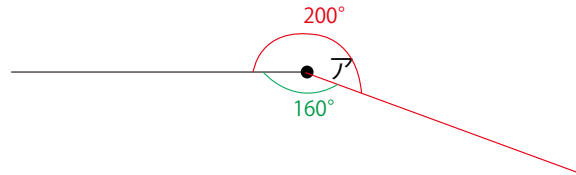
答え

①  $180^\circ$



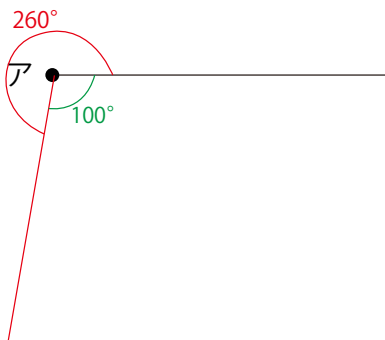
②  $200^\circ$

$$360 - 200 = 160$$



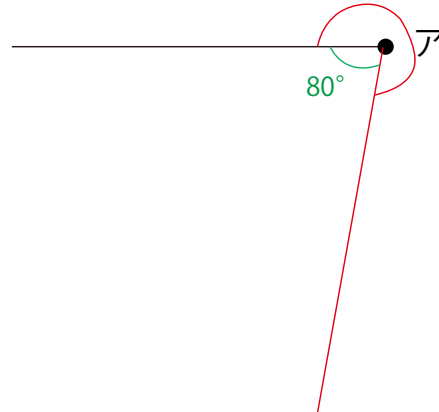
③  $260^\circ$

$$360 - 260 = 100$$



④  $280^\circ$

$$360 - 280 = 80$$



⑤  $320^\circ$

$$360 - 320 = 40$$

