

計算でもとめる2

目標時間	10分
------	-----

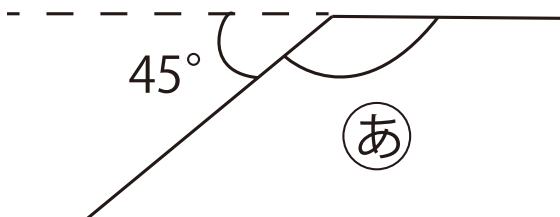
NO. 1

名前

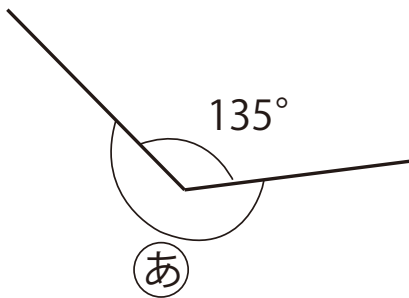
／6

計算で ① の角度を求めましょう

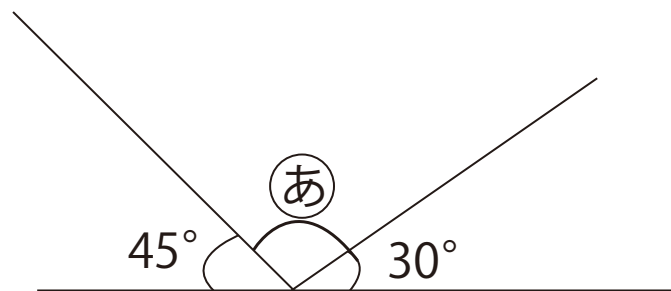
①



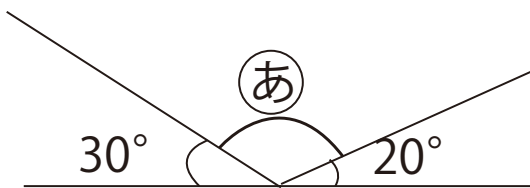
②



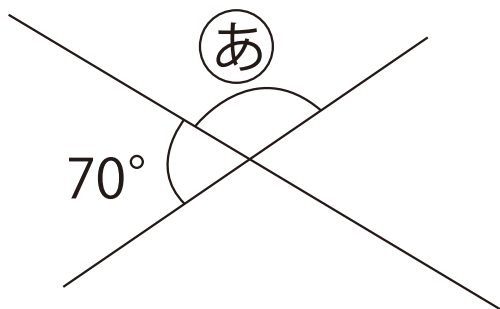
③



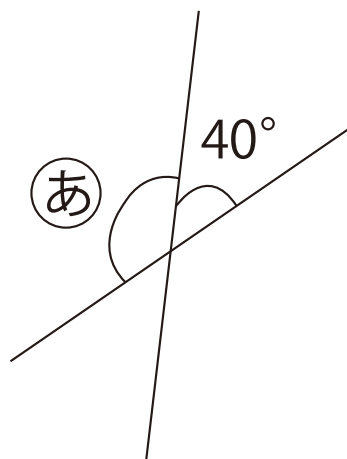
④



⑤



⑥



答え

$$\textcircled{1} \quad 180 - 45 = 135 \quad 135^\circ$$

$$\textcircled{2} \quad 360 - 135 = 225 \quad 225^\circ$$

$$\textcircled{3} \quad 180 - (45 + 30) = 105 \quad 105^\circ$$

$$\textcircled{4} \quad 180 - (30 + 20) = 130 \quad 130^\circ$$

$$\textcircled{5} \quad 180 - 70 = 110 \quad 110^\circ$$

$$\textcircled{6} \quad 180 - 40 = 140 \quad 140^\circ$$