

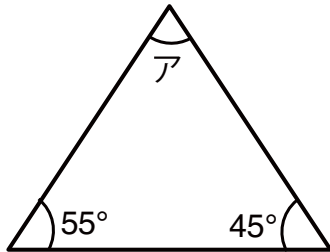
# 三角形の角度 練習 1

学習日： \_\_\_\_\_

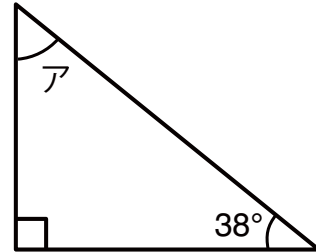
\_\_\_\_\_ 点

◆ 次のアの角度を計算で求めましょう。

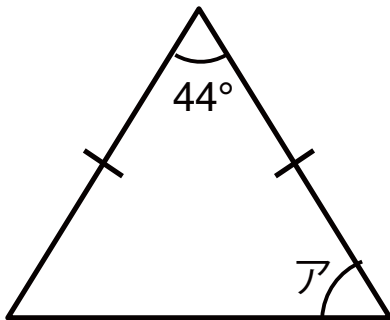
①



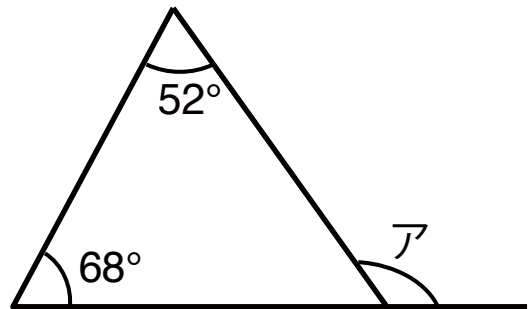
②



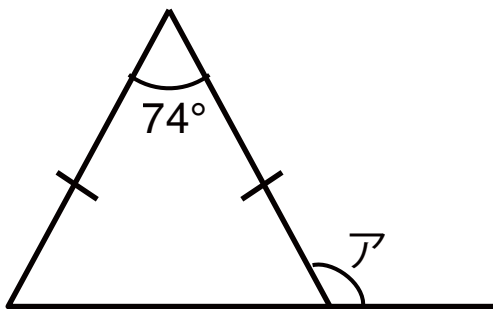
③



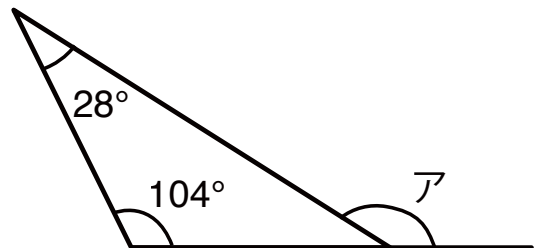
④



⑤



⑥



## 答え

$$\textcircled{1} \quad 180 - ( 55 + 45 ) = 80 \text{ } ^\circ$$

$$\textcircled{2} \quad 180 - ( 90 + 38 ) = 52 \text{ } ^\circ$$

$$\textcircled{3} \quad ( 180 - 44 ) \div 2 = 68 \text{ } ^\circ$$

$$\textcircled{4} \quad 68 + 52 = 120 \text{ } ^\circ$$

$$\textcircled{5} \quad ( 180 - 74 ) \div 2 = 53 \text{ } ^\circ$$
$$180 - 53 = \underline{\underline{127}} \text{ } ^\circ$$

$$\textcircled{6} \quad 28 + 104 = 132 \text{ } ^\circ$$