

ひし形の面積

目標時間	7分
------	----

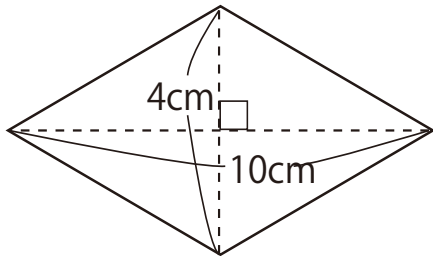
NO. 1

名前 _____

_____/_____

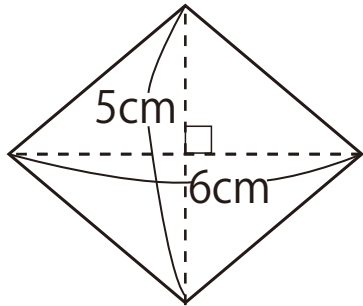
1 次のひし形の面積を求めましょう。

①



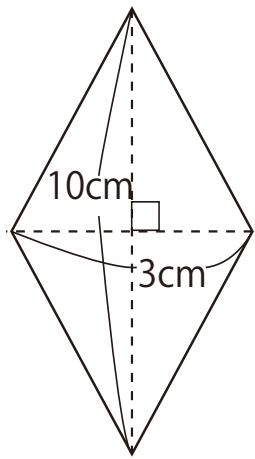
答え

②



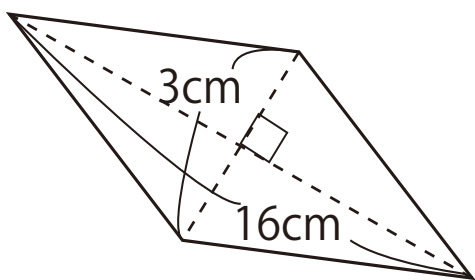
答え

③



答え

④



答え

答え

1

$$\textcircled{1} \quad 10 \times 4 \div 2 = 20$$

答え 20 cm²

$$\textcircled{2} \quad 6 \times 5 \div 2 = 15$$

答え 15 cm²

$$\textcircled{3} \quad 3 \times 10 \div 2 = 15$$

答え 15 cm²

$$\textcircled{4} \quad 3 \times 16 \div 2 = 24$$

答え 24 cm²