

垂直

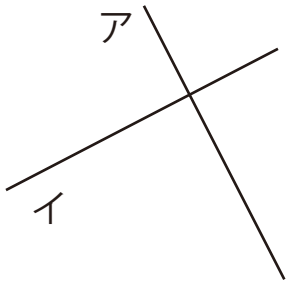
目標時間	5分
------	----

NO.1

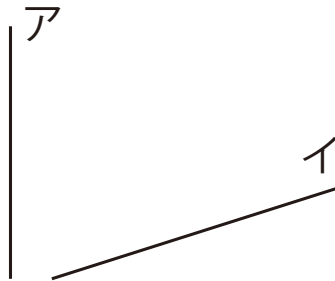
名前	
----	--

次の2本の直線ア、イが垂直になっているものをすべて選びなさい。

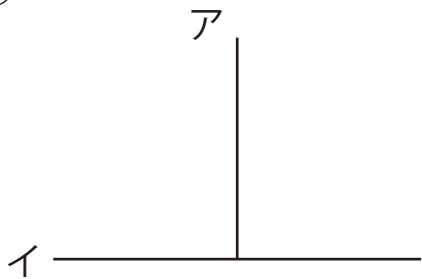
①



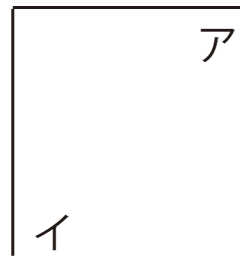
②



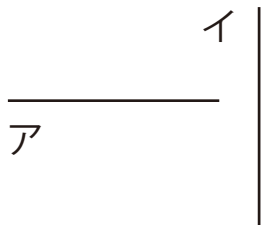
③



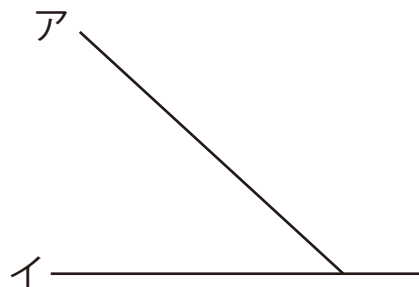
④



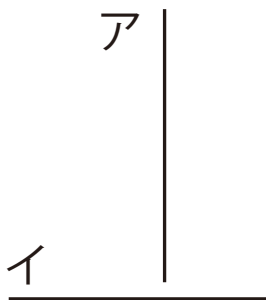
⑤



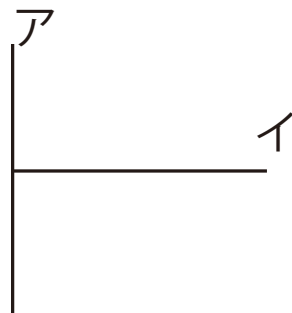
⑥



⑦



⑧



答え

- ① ③ ④ ⑤ ⑦ ⑧